




Determine which choice best describes the coins in the order shown.

Answers

1)



- A. quarter, penny, nickel, dime
B. penny, dime, quarter, nickel
C. nickel, dime, quarter, penny
D. penny, quarter, dime, nickel

1. _____

2)



- A. penny, dime, quarter, nickel
B. penny, quarter, nickel, dime
C. penny, nickel, quarter, dime
D. quarter, nickel, penny, dime

2. _____

3)



- A. penny, dime, quarter, nickel
B. quarter, dime, penny, nickel
C. penny, quarter, nickel, dime
D. dime, quarter, penny, nickel

3. _____

4)



- A. quarter, dime, nickel, penny
B. nickel, penny, dime, quarter
C. penny, dime, quarter, nickel
D. penny, dime, nickel, quarter

4. _____

5)



- A. dime, nickel, penny, quarter
B. nickel, dime, penny, quarter
C. quarter, nickel, penny, dime
D. penny, dime, quarter, nickel

5. _____

6)



- A. quarter, dime, penny, nickel
B. quarter, penny, nickel, dime
C. nickel, quarter, penny, dime
D. dime, quarter, nickel, penny

6. _____

7)



- A. nickel, dime, quarter, penny
B. penny, nickel, dime, quarter
C. dime, penny, nickel, quarter
D. nickel, penny, quarter, dime

7. _____

8)




- A. nickel, penny, dime, quarter
B. quarter, nickel, dime, penny
C. nickel, quarter, dime, penny
D. dime, nickel, penny, quarter

8. _____



Determine which choice best describes the coins in the order shown.

1)



- A. quarter, penny, nickel, dime
B. penny, dime, quarter, nickel
C. nickel, dime, quarter, penny
D. penny, quarter, dime, nickel

2)



- A. penny, dime, quarter, nickel
B. penny, quarter, nickel, dime
C. penny, nickel, quarter, dime
D. quarter, nickel, penny, dime

3)




- A. penny, dime, quarter, nickel
B. quarter, dime, penny, nickel
C. penny, quarter, nickel, dime
D. dime, quarter, penny, nickel

4)




- A. quarter, dime, nickel, penny
B. nickel, penny, dime, quarter
C. penny, dime, quarter, nickel
D. penny, dime, nickel, quarter

5)



- A. dime, nickel, penny, quarter
B. nickel, dime, penny, quarter
C. quarter, nickel, penny, dime
D. penny, dime, quarter, nickel

6)



- A. quarter, dime, penny, nickel
B. quarter, penny, nickel, dime
C. nickel, quarter, penny, dime
D. dime, quarter, nickel, penny

7)



- A. nickel, dime, quarter, penny
B. penny, nickel, dime, quarter
C. dime, penny, nickel, quarter
D. nickel, penny, quarter, dime

8)



- A. nickel, penny, dime, quarter
B. quarter, nickel, dime, penny
C. nickel, quarter, dime, penny
D. dime, nickel, penny, quarter

Answers

1. **A**
2. **C**
3. **A**
4. **C**
5. **B**
6. **B**
7. **C**
8. **B**